

Simple Function Machines

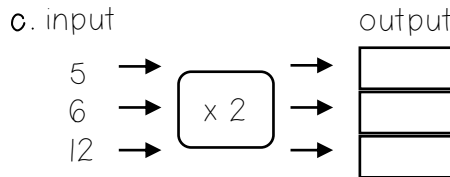
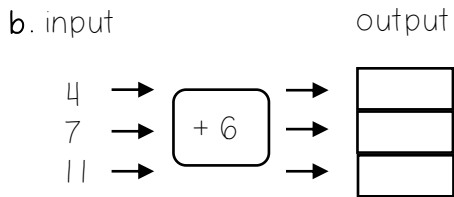
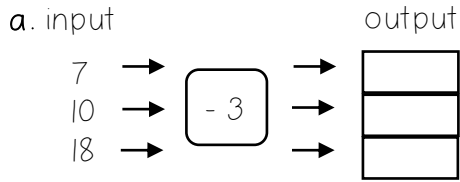
LO: To be able to find outputs of simple functions written in words and using symbols.

A _____ is a relationship between two sets of _____

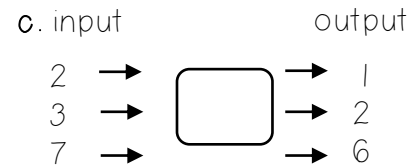
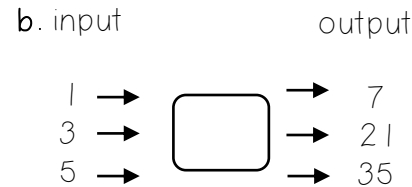
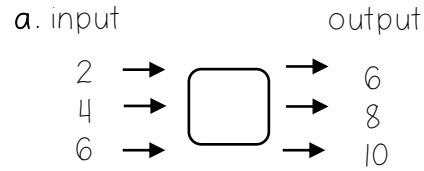
The numbers that go into a function machine are called the _____

The numbers that come out are called the _____

1. Calculate the outputs of the function machine.



2. Write down the function for each machine.



Challenge

It costs 12p for Henry to send one text message. How many text messages can he send with the following amounts of credit?

- a. £4.80
- b. £1.92
- c. £4.08

3. Calculate the outputs of these two step function machine.

