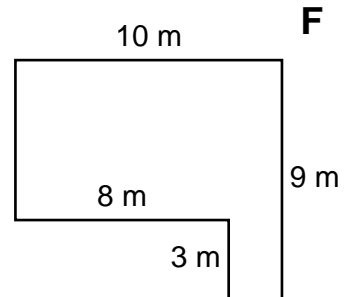
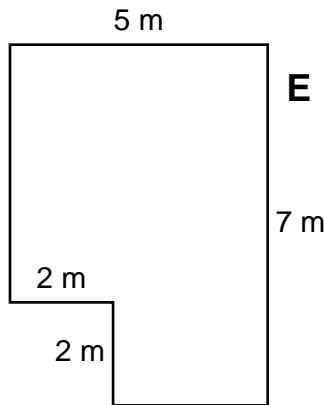
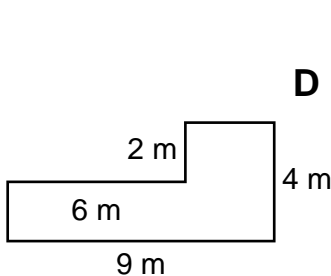
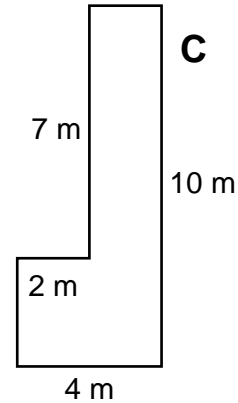
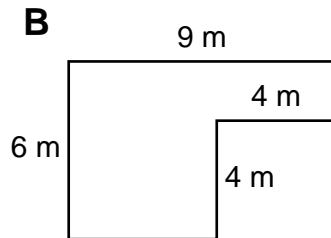
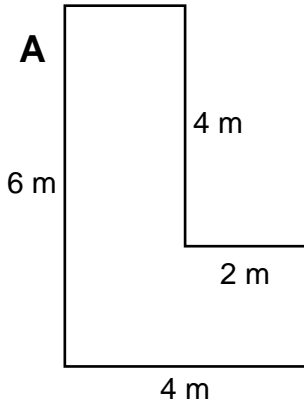


Name: _____ Date: _____

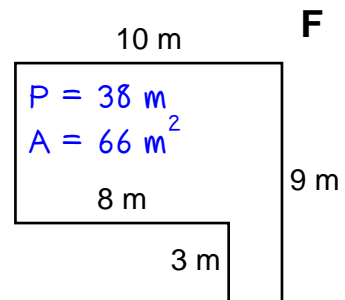
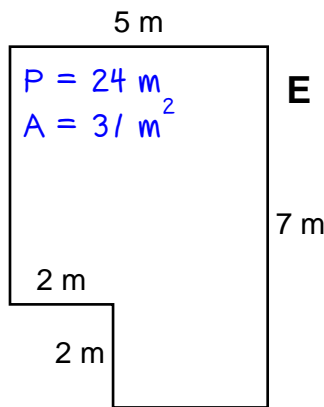
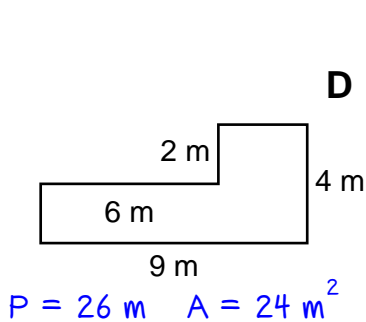
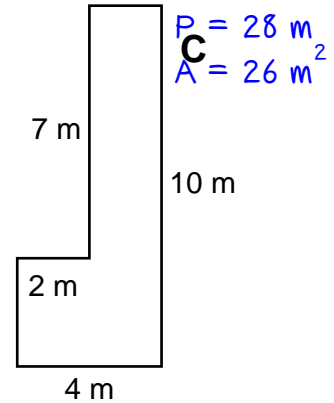
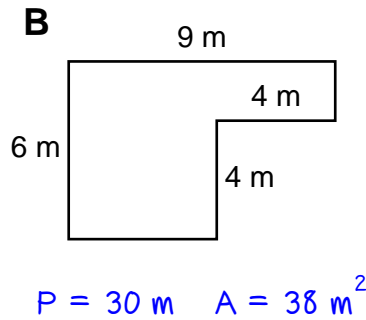
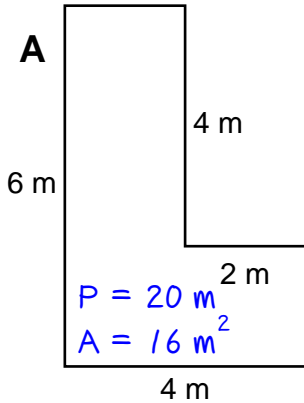
Answer the questions about these six shapes.



- | | |
|--|--|
| <p>(1) Which shapes have a perimeter greater than the perimeter of shape C? <u>B and F</u></p> <p>(2) What are the perimeters of shape E and shape F combined? _____</p> <p>(3) Which shape has a perimeter 2 m less than shape B? _____</p> <p>(4) What is the difference between the areas of shape F and shape A?
_____</p> | <p>(5) What is the area of shape F?
_____</p> <p>(6) Which shape has an area 8 m^2 greater than shape A? _____</p> <p>(7) What are the perimeters of shape A and shape C combined? _____</p> <p>(8) Which shape has an area 5 m^2 less than shape E? _____</p> |
|--|--|

ANSWER KEY

Answer the questions about these six shapes.



- (1) Which shapes have a perimeter greater than the perimeter of shape C? B and F
- (2) What are the perimeters of shape E and shape F combined? 62 m
- (3) Which shape has a perimeter 2 m less than shape B? C
- (4) What is the difference between the areas of shape F and shape A?
50 m²
- (5) What is the area of shape F?
66 m²
- (6) Which shape has an area 8 m² greater than shape A? D
- (7) What are the perimeters of shape A and shape C combined? 48 m
- (8) Which shape has an area 5 m² less than shape E? C